




Name: _____

Multiplication Method

Use the addition method to solve the illustration.



$$3 \times 2 = 6$$

$$2 + 2 + 2 = 6$$

