
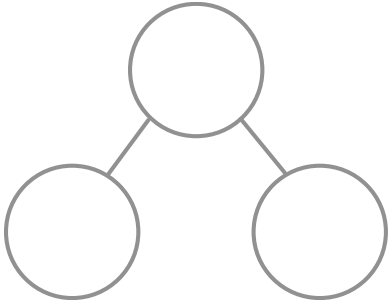

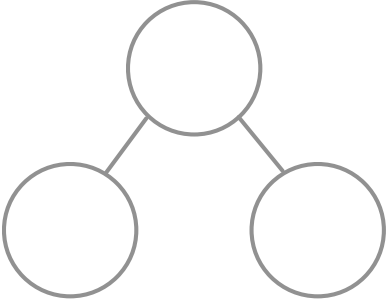


Name: _____

Place Value

Find the number and complete the following

 =					
<table border="1" data-bbox="310 856 732 1108"><thead><tr><th>Tens</th><th>Ones</th></tr></thead><tbody><tr><td> </td><td> </td></tr></tbody></table>	Tens	Ones			<p>Expand the number:</p> <p>_____ + _____ = _____</p>
Tens	Ones				
 =					
<table border="1" data-bbox="289 1585 711 1837"><thead><tr><th>Tens</th><th>Ones</th></tr></thead><tbody><tr><td> </td><td> </td></tr></tbody></table>	Tens	Ones			<p>Expand the number:</p> <p>_____ + _____ = _____</p>
Tens	Ones				