

Name: _____




Count how many cubes long each object is. Write the number of cubes in the line provided.



--	--	--	--	--	--	--	--

About _____ cubes long.



--	--	--	--	--	--	--	--

About _____ cubes long.




--	--	--	--	--	--	--	--

About _____ cubes long.




--	--	--	--	--	--	--	--

About _____ cubes long.



--	--	--	--	--	--	--	--

About _____ cubes long.



--	--	--	--	--	--	--	--

About _____ cubes long.